

KENDRIYA VIDYALAY NAD VSKP.


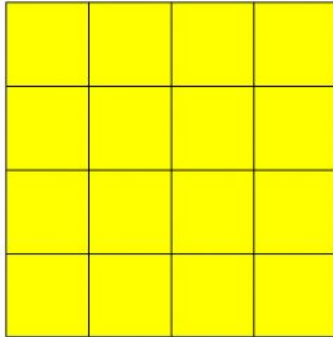
LESSON: AREA AND ITS BOUNDARY.

CLASS: V

CREATED BY: K. SUNIL(PRT)

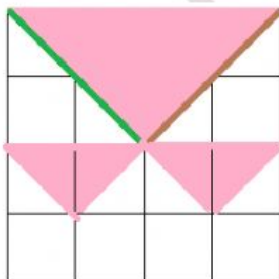
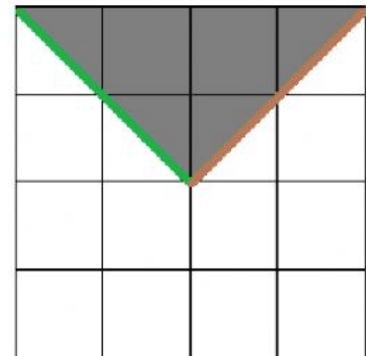
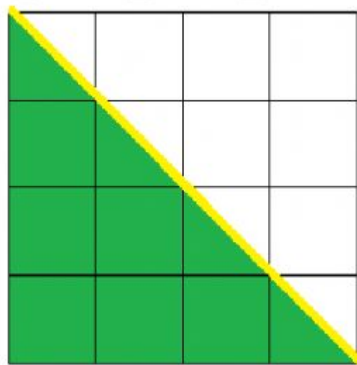
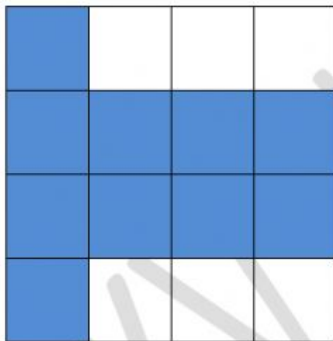
Name : _____ roll no : _____ sec: _____ Date: _____

Find the area of coloured part from the following shapes.



Area of yellow coloured shape is = _____ square cm.

Area of red coloured shape is = _____ square cm.



3. Area of blue coloured shape = _____ sq cm.

4. Area of green coloured shape = _____ sq cm.

4. Area of grey coloured shape = _____ sq cm.

5. Area of pink coloured shape = _____ sq cm.