
















Click the correct answer based on the information from the pictograph below.

The pictograph below shows the number of flowers belonging to Wafa.

Number of Wafa's flowers

Blue	    
Red	  
Green	   
Purple	  

Key:

 Represent 1 flower

- (a) Wafa has (4, 5, 6) blue flowers.
- (b) The number of (red, green, purple) flowers is 4.
- (c) The number of red flowers is (more, same, less) than the purple flowers.
- (d) The difference of the blue flowers and red flowers is (6, 4, 2)
- (e) The number of green flowers is (more, same, less) than the blue flowers.
- (f) The total of all the flowers belonging to Wafa is (13, 15, 17).