



Compare and complete the following.

1.



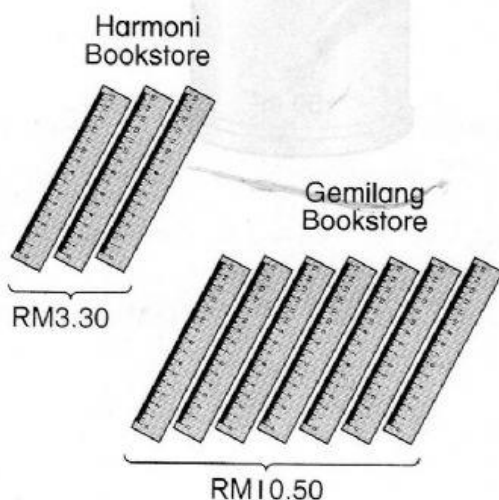
- (a) 1 l paint of Dragon Brand can cover an area of _____.
- (b) 1 l paint of Tiger Brand can cover an area of _____.
- (c) The paint of Tiger Brand can cover _____ area than the paint of Dragon Brand.

2.



- (a) The volume of 1 carton of milk is _____.
- (b) The volume of 1 bottle of milk is _____.
- (c) The milk in a carton has _____ volume than the milk in a bottle.

3.



- (a) The price of a ruler at Harmoni Bookstore is _____.
- (b) The price of a ruler at Gemilang Bookstore is _____.
- (c) The price of a ruler at Harmoni Bookstore is _____ than Gemilang Bookstore.