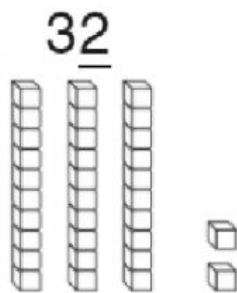
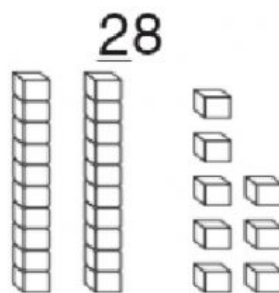


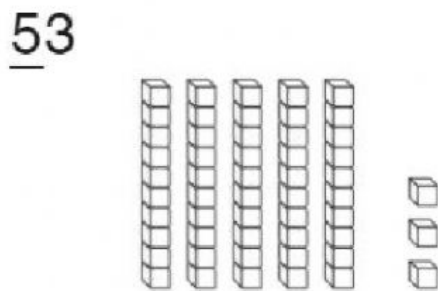
1. What is the value of the underlined digit?



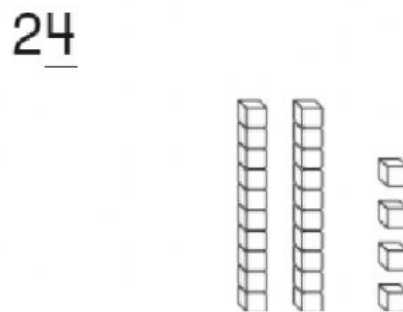
2. What is the value of the underlined digit?



3. What is the value of the underlined digit?



4. What is the value of the underlined digit?



5. Write the ODD numbers: _____

6. Write the EVEN numbers. _____

7. In your notebook, represent the following money amounts.

.85c

.41c

.55c

.38c

.25c

.15c

8. Answer the following facts.

$$\begin{array}{r} 2 \\ + 6 \\ \hline \end{array} \quad \begin{array}{r} 5 \\ + 5 \\ \hline \end{array} \quad \begin{array}{r} 2 \\ + 4 \\ \hline \end{array} \quad \begin{array}{r} 1 \\ + 5 \\ \hline \end{array} \quad \begin{array}{r} 5 \\ + 1 \\ \hline \end{array} \quad \begin{array}{r} 7 \\ + 3 \\ \hline \end{array} \quad \begin{array}{r} 6 \\ + 3 \\ \hline \end{array} \quad \begin{array}{r} 1 \\ + 4 \\ \hline \end{array}$$

$$\begin{array}{r} 1 \\ + 2 \\ \hline \end{array} \quad \begin{array}{r} 8 \\ + 2 \\ \hline \end{array} \quad \begin{array}{r} 4 \\ + 2 \\ \hline \end{array} \quad \begin{array}{r} 2 \\ + 5 \\ \hline \end{array} \quad \begin{array}{r} 4 \\ + 4 \\ \hline \end{array} \quad \begin{array}{r} 5 \\ + 3 \\ \hline \end{array} \quad \begin{array}{r} 2 \\ + 3 \\ \hline \end{array} \quad \begin{array}{r} 3 \\ + 3 \\ \hline \end{array}$$

$$\begin{array}{r} 3 \\ + 5 \\ \hline \end{array} \quad \begin{array}{r} 2 \\ + 8 \\ \hline \end{array} \quad \begin{array}{r} 7 \\ + 1 \\ \hline \end{array} \quad \begin{array}{r} 2 \\ + 7 \\ \hline \end{array} \quad \begin{array}{r} 4 \\ + 5 \\ \hline \end{array} \quad \begin{array}{r} 3 \\ + 6 \\ \hline \end{array} \quad \begin{array}{r} 3 \\ + 7 \\ \hline \end{array} \quad \begin{array}{r} 5 \\ + 4 \\ \hline \end{array}$$

$$\begin{array}{r} 7 \\ + 2 \\ \hline \end{array} \quad \begin{array}{r} 6 \\ + 2 \\ \hline \end{array} \quad \begin{array}{r} 1 \\ + 8 \\ \hline \end{array} \quad \begin{array}{r} 3 \\ + 4 \\ \hline \end{array} \quad \begin{array}{r} 6 \\ + 1 \\ \hline \end{array} \quad \begin{array}{r} 4 \\ + 3 \\ \hline \end{array} \quad \begin{array}{r} 1 \\ + 1 \\ \hline \end{array} \quad \begin{array}{r} 1 \\ + 3 \\ \hline \end{array}$$