

NAME : _____

CLASS : _____

DATE : _____

1.

Given curve is



☐ a) Closed

☐ b) Open

2. Which figure represent the Ray

☐ a)



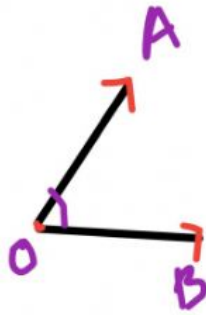
☐ b)



☐ c)



3.



Name of the angle is

☐ a) $\angle AOA$

☐ b) $\angle BOB$

☐ c) $\angle AOB$

☐ d) $\angle B$

4.

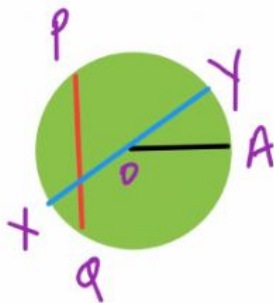


The given figure is

☐ a) Triangle

☐ b) Quadrilateral

5.



Chord in the figure


☐ a) OX

☐ b) OA

☐ c) PQ

☐ d) OY

6.



Red coloured part in the circle is

☐ a) Sector

☐ b) Segment

☐ c) Radius

☐ d) Arc

7. Smallest prime number is

Answer Key

1. b
2. a

3. c
4. a

5. c
6. b

7. 2