





- 1) The tally table shows the students' favourite foods. Can you find what is the number of students for each food. Please drag the answer into the boxes.

Food	Tally	Number of students
		<input type="text"/>
		<input type="text"/>
		<input type="text"/>
		<input type="text"/>



10

4

9

7

- 2) Look at the tally's table. Tick the correct answer.

Which buns were sold the least?	
Type of bun	Tally
	
	
	



Cards owned by	Tally
Brian	
John	
Sally	

How many cards does Brian have?

7

9

13

Ways of coming to school	Tally
Bus	
Car	
Bicycle	

How many students ride a bicycle to school?

3

4

5

Type of food	Tally
Noodles	
Sandwiches	
Nuggets	
Curry puffs	

The table shows the food sold at the canteen. The canteen sold the same amount of which food ?

Sandwiches and nuggets

Sandwiches and curry puffs

Nuggets and curry puffs

How many more mangoes than pears were sold?

Fruit	Tally	Number of fruits sold
Apple		8
Mango		10
Pear		6

3

4

2