

**CLASS TEST**  
**Class – 5**  
**Topic – Boxes and Sketches**

**1. How many sides in a Circle?**

- i) 0
- ii) 1
- iii) 2
- iv) 3

**2. Name the shape which is given below:**

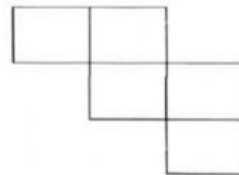
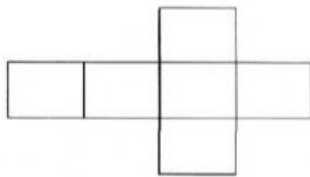
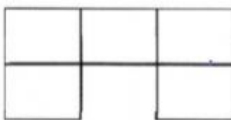


- i) Square
- ii) Rectangle
- iii) Circle
- iv) Triangle

**3. How many faces does a cuboid have?**

- i) 4
- ii) 3
- iii) 6
- iv) 5

**4. Which of these nets will make a cube ? Tick them:**



**5. Select the correct option, A cylinder have :**

- a. 3 Faces, 2 Edges and 0 Vertex.
- b. 2 Faces, 3 Edges and 0 Vertex.
- c. 3 Faces, 2 Edges and 2 Vertex.
- d. 2 Faces, 4 Edges and 0 Vertex.

6. Match the following shapes with their respective nets.

