

Name:
3D Shapes.

Kelas:

1. Name the 3-D shapes as described.

- a
- 1 vertex



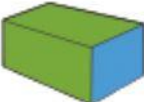











1 flat face

1 curved face
- b
- 2 flat square faces

8 vertices

4 flat rectangular faces

2. Complete the number of basic shapes.

3-D shape	Name	Basic shape	Number
	Cube		
	Cuboid		
			
	Pyramid		
			
	Cylinder		
			
	Cone		
			

3. Name the 3-D shape for each net below.

