





# Colegio Pequeños Bilingües

## Fourth Term



Teacher: Qca. Jaznemileth Grillo Garavito

Grado: Tercero primary

Topic: FINAL EXAM

Test worksheet

Name: \_\_\_\_\_

Date

Name of day

Month

Day number

Year

Score

1. Put the names in the correct place in the following circuit

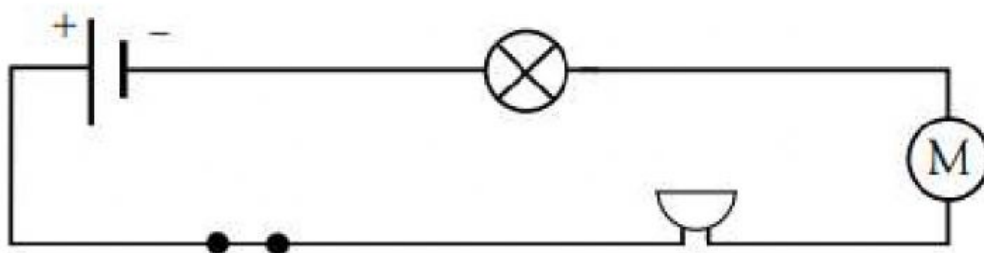
MOTOR

CELL BATTERY

BULB/LIGH

SWITCH

BUZZER



2. Humans have five senses that help us. Draw a line to match the sense to the correct sense organ

I hear with my

tongue

I taste with my

skin

I see with my

ears

I smell with my

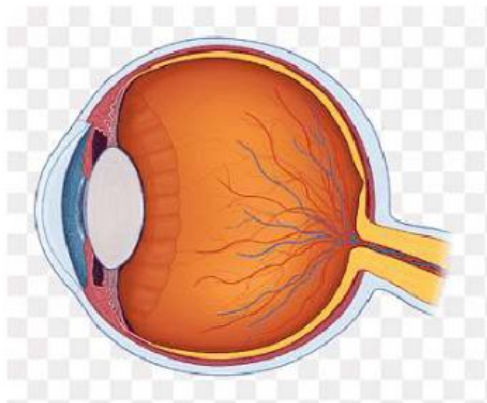
eyes

I feel hot and cold with my

nose



3. Select ONLY the parts of the eye



IRIS

PUPIL

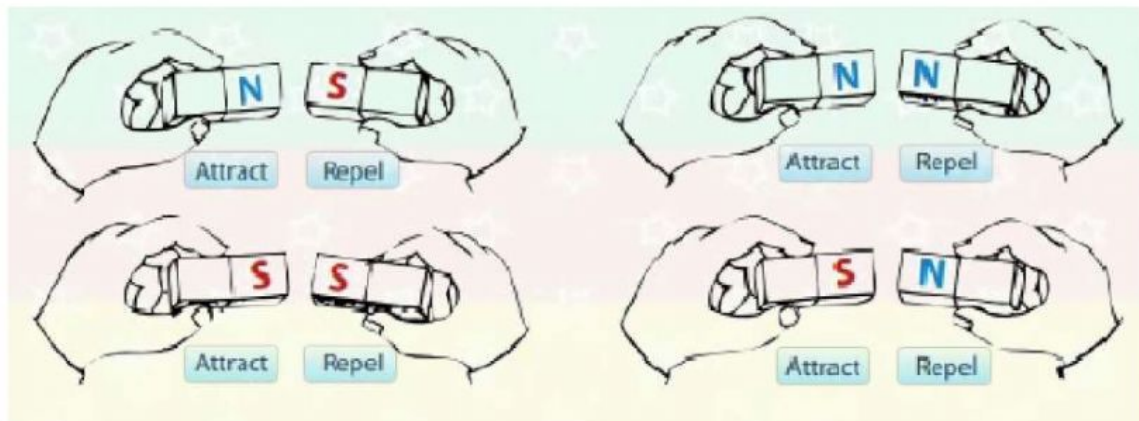
LENS

COCHLEA

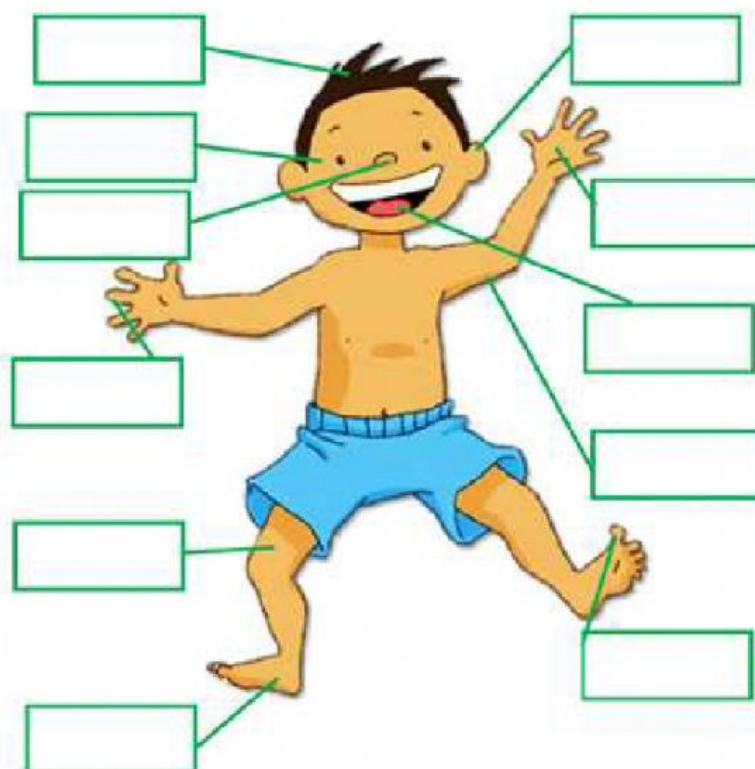
OPTIC  
NERVE

RETINA

4. Look at each pair of magnets and select the correct answer.



5. Draw a line to match the parts of the body with the correct name.



mouth

eye

leg

toe

arm

hair

ear

foot

finger

hand

nose