

KENDRIYA VIDYALAYA AFS,BAGDOGRA

2020-21

WORKSHEET-DECEMBER

CLASS- I.

SUBJECT-

MATHS

NAME- _____


SECTION- _____


TEACHER'S SIGN - _____

PARENT'S SIGN - _____

KNOWLEDGE


1. Count and write the number.











UNDERSTANDING

Match the following with the correct number.

$4 - 2.$

6.

$1 - 0.$

1.

$6 + 2.$

7.

$7 + 0.$

8.

$5 + 1.$

2.


ABILITY TO COMPUTE

Solve the sums.




-



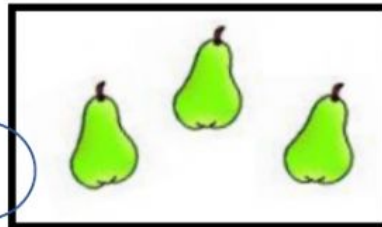


+





+



PROBLEM SOLVING ABILITY

$$8 - \underline{\quad} = 7.$$

$$\underline{\quad} + 2 = 7.$$

$$3 - \underline{\quad} = 3$$

$$\underline{\quad} + 0 = 4$$

$$5 + 1 = \underline{\quad}$$