

Name: _____ {IP}

Comparing Numbers

_____/10


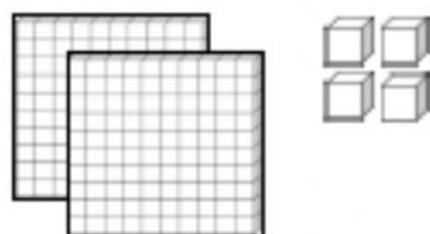
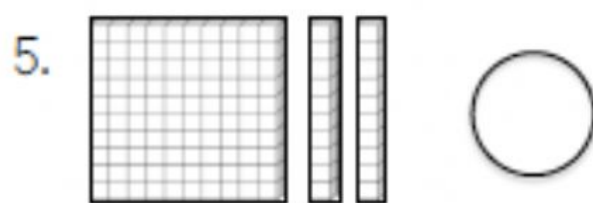
Fill in the circles with $>$, $<$, or $=$.

1. 362 263

3. 442 442

2. 190 129

4. 148 184



7. $600 + 50 + 4$ $500 + 90 + 9$

8. $300 + 60 + 7$ $600 + 70 + 3$

9. Circle the greater number.

908

930

Explain in words how you know this is the greater number.
