


Name: \_\_\_\_\_

Date: \_\_\_\_\_

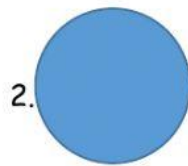
Mathematical Concepts - Polygons

Topic: Plane Shapes

- A. Draw a line to match each plane shape to its correct name.  
[1 pt. each]




star



triangle



square



circle



diamond



oval



rectangle

- B. Write how many sides and corners there are for each shape below. [1 pt. each]

8.




\_\_\_\_\_ sides    \_\_\_\_\_ corners

9.




\_\_\_\_\_ sides    \_\_\_\_\_ corners

10.



\_\_\_\_\_ sides    \_\_\_\_\_ corners

11.



\_\_\_\_\_ sides    \_\_\_\_\_ corners