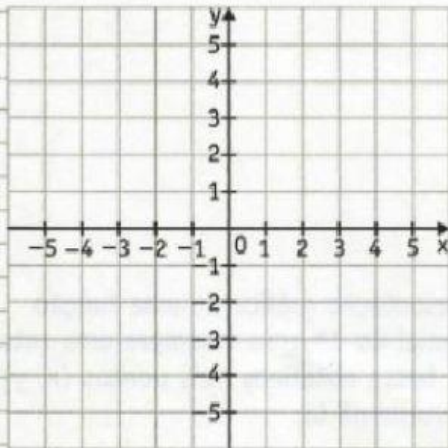


9. Construa o gráfico das funções polinomiais do 1º grau.

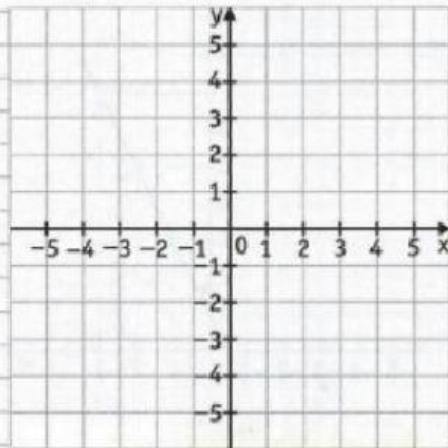
a) $y = 2x + 2$

x	y	(x, y)



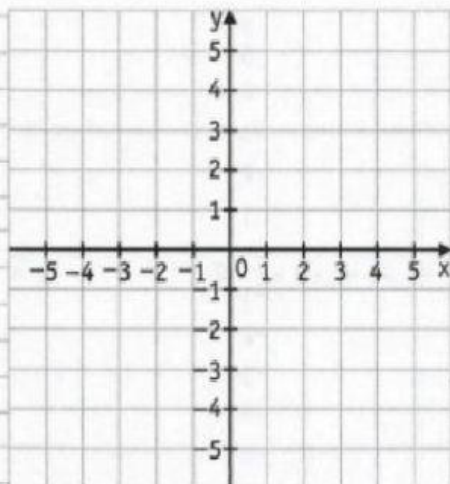
b) $y = 3x + 1$

x	y	(x, y)



c) $y = -2x + 3$

x	y	(x, y)



d) $y = 4x$

x	y	(x, y)

