

Números enteros

1. Resuelve:

$$-5 + 12 =$$

$$-9 - 9 =$$

$$-15 + 11 =$$

$$-4 + 8 =$$

$$-4 - 8 =$$

$$-18 + 7 =$$

$$15 + 9 =$$

$$-11 + 17 =$$

$$4 - 7 =$$

$$4 + 7 =$$

2. Calcula:

$$-1 - 2 - 3 + 5 =$$

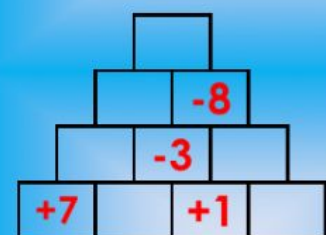
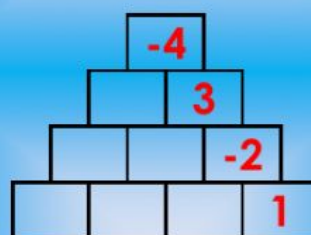
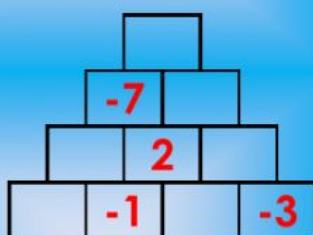
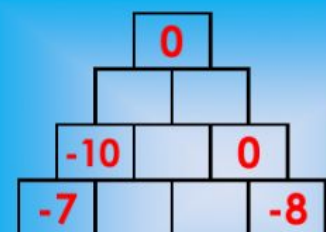
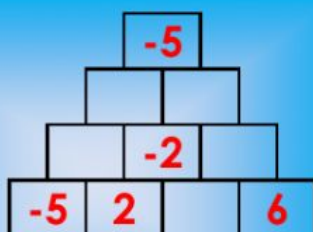
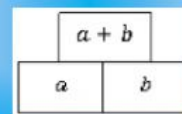
$$+3 - 4 + 5 - 2 + 3 =$$

$$+2 + 15 - 9 - 11 + 6 - 4 + 1 + 3 - 7 =$$

$$12 - 7 - 4 + 3 =$$

$$-3 - 4 - 5 + 1 =$$

3. Pirámides de números enteros:



4. Calcula el valor de \bullet^* :

$$12 - \bullet^* + 3 = -10 \quad \rightarrow \quad \bullet^* =$$