



Balanced and Unbalanced Forces

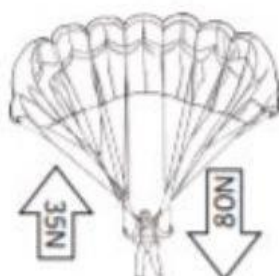
- In box a below each diagram, write whether the forces acting overall are balanced or unbalanced.
- In box b below each diagram, say either which direction the object will move in or whether it will remain stationary.
- Label the arrows in each diagram with the name of the force which is acting.



| |
|----|
| a. |
| b. |



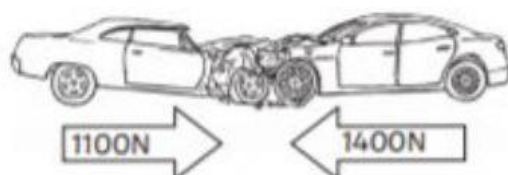
| |
|----|
| a. |
| b. |



| |
|----|
| a. |
| b. |



| |
|----|
| a. |
| b. |



| |
|----|
| a. |
| b. |



| |
|----|
| a. |
| b. |