



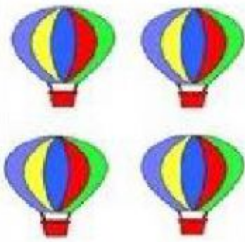

# LIFE INTERNATIONAL SCHOOL



## QUARTER 2 EXAM IN MATH



### Kindergarten

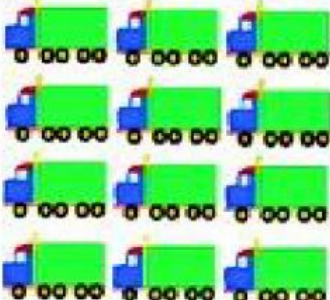

Name: \_\_\_\_\_ Date: \_\_\_\_\_ Score: \_\_\_\_ / 30

I- Count the objects and choose the number in the box.


1.  = 


2.  = 


3.  = 

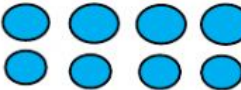
4.  = 


II- Write the number on the line that matches the number of objects.


 \_\_\_\_\_


 \_\_\_\_\_

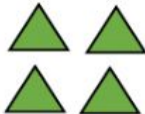
 \_\_\_\_\_

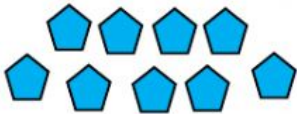
 \_\_\_\_\_


 \_\_\_\_\_

 \_\_\_\_\_


 \_\_\_\_\_

 \_\_\_\_\_

 \_\_\_\_\_

 \_\_\_\_\_

III- Complete and Write in the heart each missing numbers.



IV- Connect and match the number words with the counting numbers.

