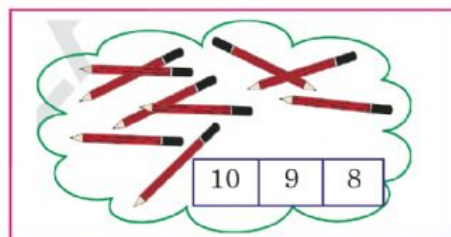
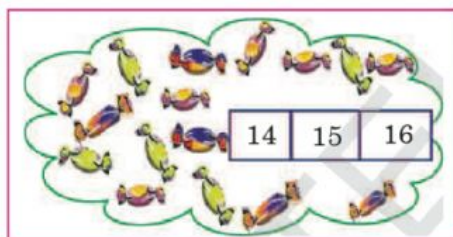
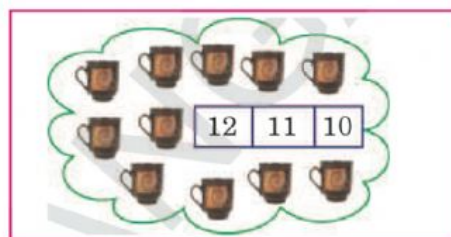
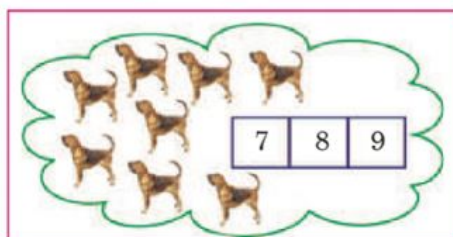
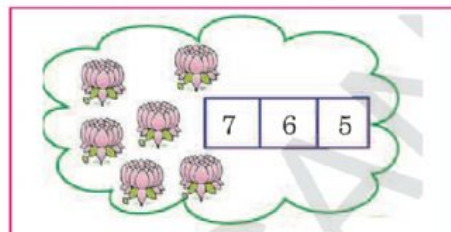
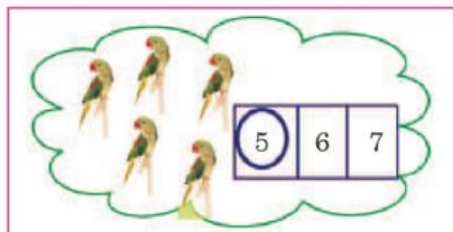




Exercise:

1. Count the pictures. Select the correct number .




powered by <https://klc.naabadi.org>

1. Write the correct number in given box.

1	2			5
6		8		
11				
16				20

3. Drag and drop numbers between 10 and 20 into the \triangle

Drag and drop numbers less than 10 into the \bigcirc .



- | | |
|----|----|
| 1 | 14 |
| 6 | 9 |
| 8 | 3 |
| 11 | 5 |
| 7 | 2 |
| 10 | 16 |
| 17 | 15 |



Get your pupils to understand and solve the exercise from questions 1 to 11.