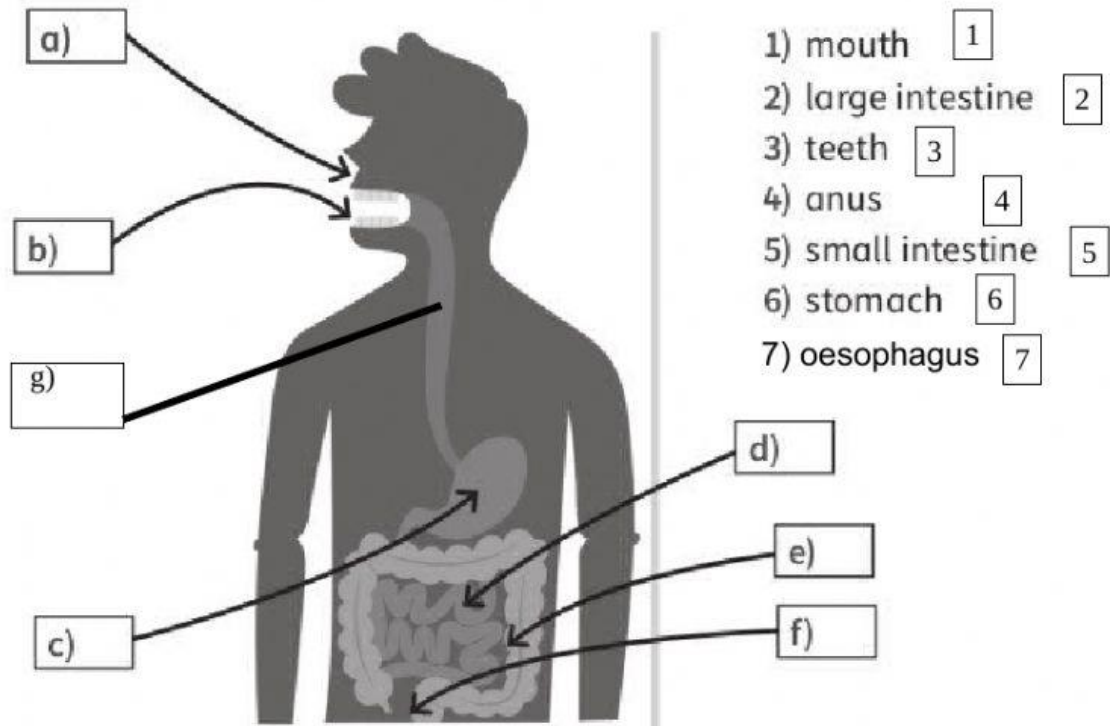


NATURAL SCIENCES UNIT 2. CHALLENGE!!!

Look at the digestive system. Read and write the number.








Look at the respiratory system. Read and order the sentences.

- a) The oxygen goes to the heart.
- b) The air goes to the lungs.
- c) We breathe in air through our nose or mouth.
- d) The heart pumps blood with oxygen around the body.



The five senses: complete the chart.

TASTE	SKIN	SIGHT	NOSE	TOUCH	
	EYES	SMELL	HEARING	TONGUE	EARS

					
PART OF THE BODY					
SENSE					

Order the sentences.

1	2	3	4	5	6
---	---	---	---	---	---

_____ The stomach breaks the food down into nutrients.

_____ Food goes into your mouth. You chew the food with the teeth.

_____ The small intestine absorbs the nutrients.

_____ The waste goes out through the anus.

_____ Food goes down your oesophagus and to your stomach.

_____ The large intestine takes waste to the anus.