


Q.1. choose the correct figure.

A) Which teapot contains the most tea?




B) Which glass holds the most juice?




C) Which mug holds the most cocoa?



D) Which bottle holds the most bubble bath?



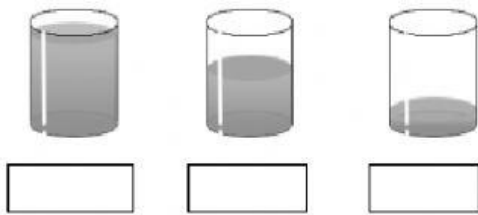
E) Which glass holds the least juice?



F) Which bottle holds the most bubble bath?



G) Which glass holds the most juice?



H) Which bottle holds the least bubble bath?



### Formation of Numbers

Q.2. Complete the following table according to the example given:

Eg. 1 litre = 1000 millilitres

SL.NO	LITRE	MILLILITRE
1.	Half a litre	
2.	Two litres	
3	Two and a half litre	
4.	Three litres	
5.	Five litres	
6.	Six litres	
7.	Seven litres	
8.	Eight litres	
9.	Seven and one litre	
10.	Five litres and a half litre	
11.	Ten litres	
12.	Four litres and 500 millilitres	