

Name: _____

Class: _____

TOPIC: MACHINE

Watch the video carefully and answer the following questions.



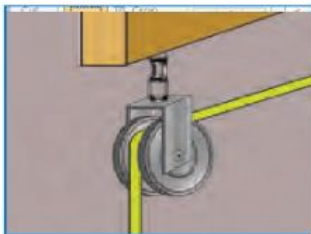
A) Match the name of pulley with correct picture below. (Refer textbook in page 135)



Movable pulley



Fixed pulley

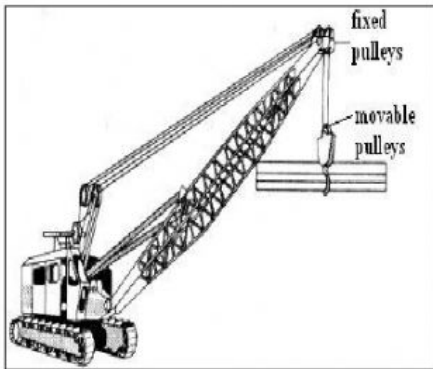


Compound pulley

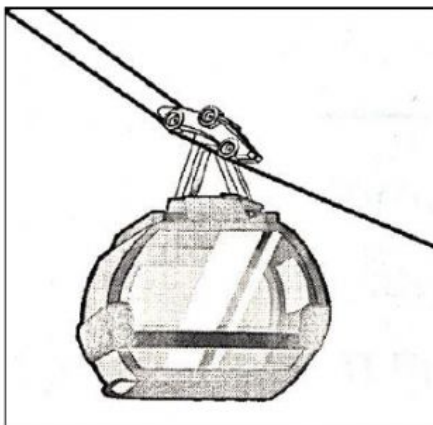
B) Match the following diagram with the correct types of pulley.



Movable pulley



Fixed pulley



Compound pulley