


Name:

Class:

Problem solvings.




1 Mimi gives Misha 5 of the 7 pieces of cake. What fraction of the cake did mimi get?




2 Seri eats $\frac{1}{8}$ pizza. Siti eats $\frac{1}{4}$ pizza. Who gets to eat the larger pieces of pizza?

Gary coloured blue and yellow in



3 Gary colored blue and yellow on the pattern as in the picture. State the yellow part in decimals.



4 Amey and Hana share a moon cake. Amey eats $\frac{1}{2}$ portion and Hana eats $\frac{1}{4}$ portion. Is the moon cake still left?

