
































Thelma Gibson Primary
First Grade Application Examination
Christmas Term 2020

Name: _____

A. Select the correct picture to complete the pattern.
 (1pt. each)

B. Select the correct answer. (1pt. each)

1. An _____ is hot.



2. A _____ is heavy.



3. Number _____ comes between 14 and 16.

6

15

19


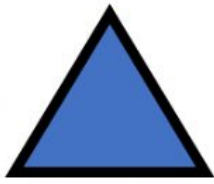
4. Number _____ comes after 3.

8

2

4

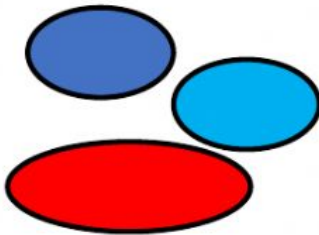
5. A _____ has 4 equal sides.



6. A _____ can roll and stack.



7. Which group of shapes is sorted by color?



C. Look at the picture. Then write the correct answer.
(1pt. each)

8. Which person is the tallest? _____

9. Which person is the shortest? _____

D. Find the sum. Type the amount on the blank.

(1pt. each)



How many hats in all?



How many snowmen in all?



How many balls in all?

0



How many snails in all?



How many trees in all?