

Mathematics Review  
Christmas Term  
Grade 1

A. Shapes

Draw a line from the word to the correct shape.



square

circle

triangle

cone

cube



## ***B. Positional Words***


*Select the person at the bottom.*



*Select the object in the middle.*



*Select the position of the bird.*



### **C. Counting**


*Fill in the missing numbers to complete the chart below.*

	<b>1</b>	<b>2</b>		<b>4</b>
<b>5</b>		<b>7</b>	<b>8</b>	<b>10</b>
	<b>12</b>		<b>14</b>	<b>15</b>
<b>16</b>		<b>18</b>		<b>20</b>



### D. Number Sense

Count the objects in each box. Write how many objects are in each box.



### E. Before and After Numbers

Write the number that is missing.



\_\_, 3, 4



\_\_ 6, 7



11, 12, \_\_



15, 16, \_\_



## *F. Number Words*

*Write the number word for each digit.*

**2** \_\_\_\_\_

**5** \_\_\_\_\_

**10** \_\_\_\_\_

**1** \_\_\_\_\_

**4** \_\_\_\_\_

**8** \_\_\_\_\_

*Created by Mrs. L. Moss*