



MATH COMPUTATION EXAM
(Total Marks - 15)

Name: _____


1. Join the sets and type the sum in the box.

[1]



2. Join the sets and type the sum in the box.

[1]



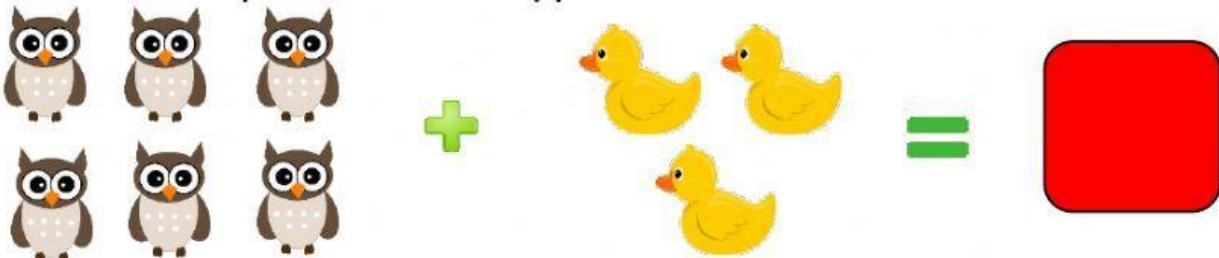
3. Count the pictures and type the sum in the box.

[1]



4. Count the pictures and type the sum in the box.

[1]




5. Count the objects in each box. Select the number that tells how many there are. [4]



10

7

8



4

9

5



7

9

1



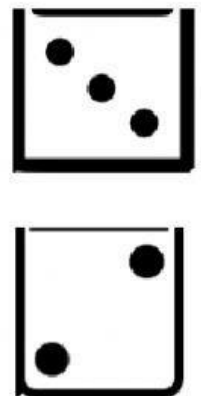


2

6

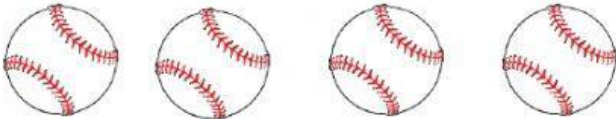

4

6. Drag the dots to add the required amount needed to complete the set.

[2]



7. Draw a line to match from the pictures to the tally marks that tell how many are in each set. [2]



8. Add to find the sum. Type your answer in the box. [3]

$$5 + 3 =$$

$$7 + 0 =$$

$$5 + 5 =$$