


MATH APPLICATION EXAM
(Total Points = 15)

Name: _____

Read and answer **ALL** questions carefully.

1. Count the legs on the spider. Tell how many there are. [1]

There are _____ in all.



2. Count the bats in each set. Then write the total. [1]



Answer = _____

3. What happens to ice cream if you leave it in the sun? [1]

- a. It will get hard.
- b. It will become soft.
- c. It will stay the same.
- d. It will feel smooth.



4. Pam went to the shop. She bought some buttons.



a. How many buttons are there altogether?

[1]

Answer: _____

b. **Add TWO more buttons.** Now write the new number on the line.

[2]



Answer: _____

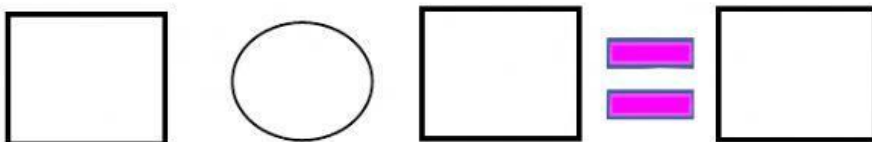
5. Tom has **4** balls. He found **4** more balls.
How many balls does he have in all?

[3]

_____ + _____ = _____ balls

6. Meg has **7** pigs. She gets **3** more pigs.
What is the sum?

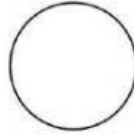

[4]



7. a. Choose the shape that describes the object. [1]

I am the shape of the sun.

I do not have any sides or corners.



b. What shape am I? Place the name on the line. [1]

I am a _____.

triangle

rectangle

circle