



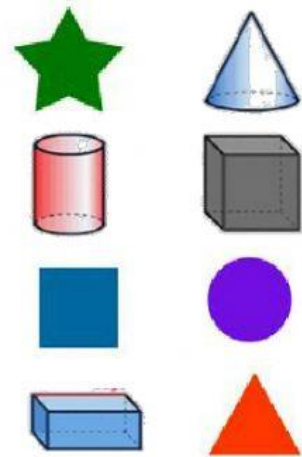
Name: \_\_\_\_\_

## Mathematics – End of Term Examination


























Read the instructions carefully. Answer the questions.

**Section A – Sort the shapes into the correct column.**









Flat Shapes	Solid Shapes



**Section B – Patterns – Complete the patterns below.**





     		
      		
     		

**Section C – Temperature and Mass – Choose the correct answer.**

<p><b>Which object is heavy?</b></p>  	<p><b>Which object is light?</b></p>  
<p><b>Choose the object that is cold.</b></p>  	<p><b>Choose the object that is hot.</b></p>  



**Section D – Length and height – Choose the correct answer.**

<p>Which object is short?</p> 	<p>Which object is long?</p> 
<p>Which object is taller?</p> 	<p>Which object is shortest?</p> 

**Section E – Draw a line to connect the digit to the correct number word or tally mark.**









**Section A**

- 6
- 3
- 1
- 8

**Section B**

- three
- ~~||||~~ |||
- six
- |

**Section F – Join the sets. Write the correct answer.**

 +  = _____	 +  = _____
 +  = _____	 +  = _____

**Section G – Problem Solving – Read the problem, then solve.**

- 2 ducks on a pond.
- 3 ducks join them.
- How many ducks altogether?

\_\_\_\_\_ + \_\_\_\_\_ = \_\_\_\_\_

