





# Colegio Pequeños Bilingües

## Fourth Period



Qca. Jaznemileth Grillo Garavito

Grado: Tercero primary

Topic: The Atom and electricity

SHOW ME WHAT YOU KNOW

Name: \_\_\_\_\_

Date

Name of day

Month

Day number

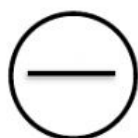
Year

Score:

Goal 1. The student is able to identify simple trends and patterns in electricity.

Goal 2. The student is able to identify the concept of atom and their parts.


1. Name the three different parts of the atom.



\_\_\_\_\_



\_\_\_\_\_

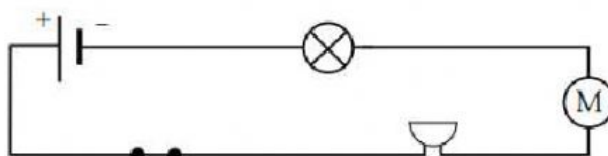


\_\_\_\_\_

2. Place the name of each symbol:

_____	_____	_____	_____	_____

3. Look at the circuit diagram shown below.



Complete the following sentences about the circuit shown above.



- a. The electric current leaves the battery and passes through the
- b. It then travels through the , net through the
- c. And finally passes through the  before returning to the battery.

4. Define the term and write one example.

	Definition	Example
INSULATOR		
CONDUCTOR		

5. Attract or repel? Write the correct answer.

