

MATH CONCEPTS EXAM
(Total Points = 20)

Name: _____

1. Look at the objects below. Choose **ALL** of the shapes that are rectangles. [2]



2. Choose the word that best describes the **position of the** bird. [1]



around

above

inside

3. Choose the word that best describes the **position of the** dog. [1]



beside

under

inside


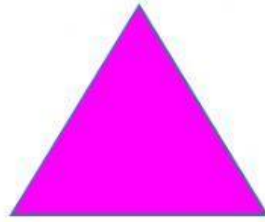

4. Place the correct name under each shape.

[3]

circle

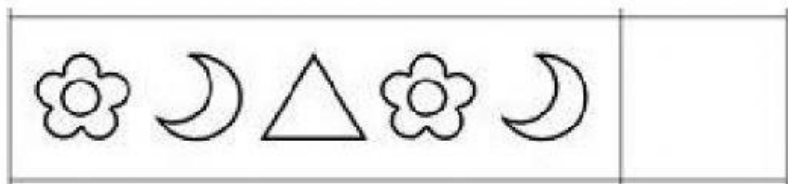


oval

triangle



5. Choose the **shape** that completes each pattern?

[2]



6. Select the **shortest** object.

[1]




7. Select the **tallest** girl.

[1]



8. Which shape can **roll** and **slide**?

[1]



9. Which fruit is the **lightest**?

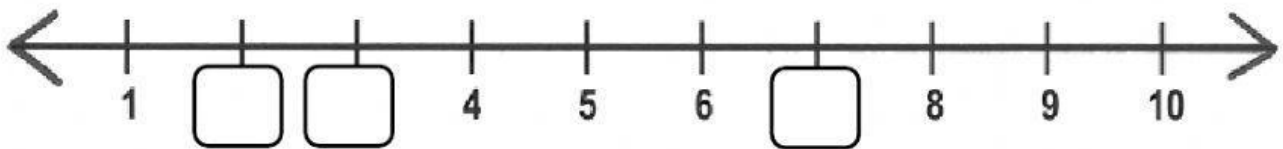
[1]



10. Select the child that is **3rd place** in the line. [1]



11. Fill in the **missing numbers** on the number line below. [3]



12. Choose the number **six**. [1]

4 9 6 2

13. Type the number that comes **before 1**. [1]

_____ 1

14. Type the number that comes **after 6**. [1]

6 _____