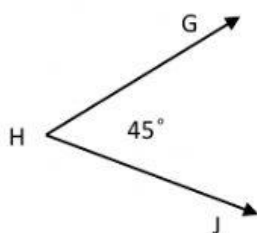


Name: _____

Naming Angles

Describe each type of angle by writing acute, obtuse, right, straight or reflex; then write the third way of how the angle can be named.

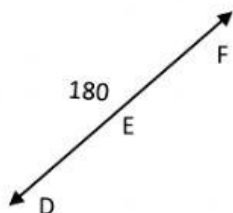
1)



Type of angle = _____

Name of angle = \widehat{GHJ} or \widehat{H} or _____

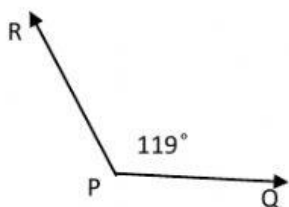
2)



Type of angle = _____

Name of angle = \widehat{DEF} or \widehat{E} or _____

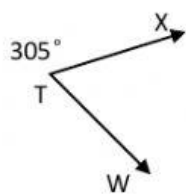
3)



Type of angle = _____

Name of angle = \widehat{RPQ} or \widehat{QPR} or _____

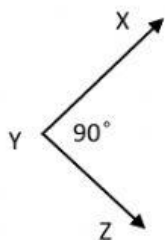
4)



Type of angle = _____

Name of angle = \widehat{WTX} or \widehat{T} or _____

5)



Type of angle = _____

Name of angle = \widehat{XYZ} or \widehat{ZYX} or _____