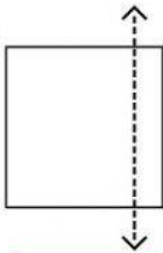


SYMMETRY

Tell whether the dotted line on each shape a line of symmetry is. Tick **YES** or **NO**.

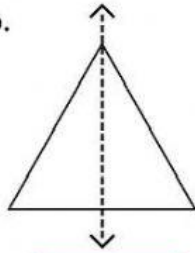
a.



YES

NO

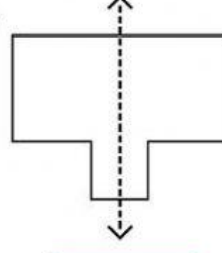
b.



YES

NO

c.



YES

NO

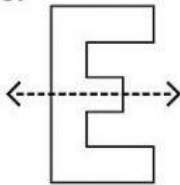
d.



YES

NO

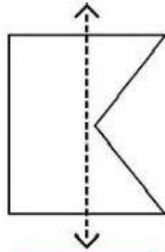
e.



YES

NO

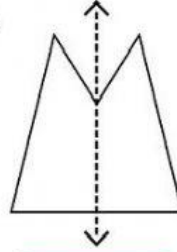
f.



YES

NO

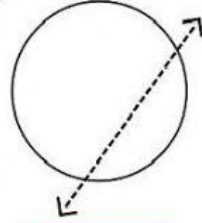
g.



YES

NO

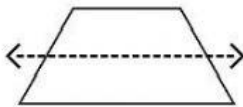
h.



YES

NO

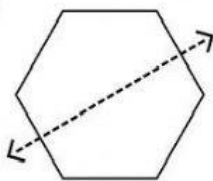
i.



YES

NO

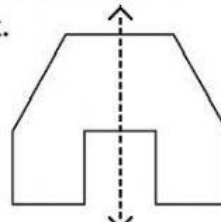
j.



YES

NO

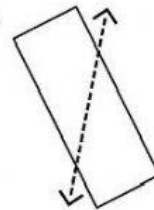
k.



YES

NO

l.



YES

NO