



Telling the time Quiz

1) Name the clock's hands.



Minutes

Hours

2) When the big hand is pointing at number 12 we say

3) When the big hand is pointing at number 3 we say

4) When the big hand is pointing at number 6 we say

5) When the big hand is pointing at number 9 we say



6) Write the missing numbers on the clock.

Place the hands around the clock to count by 5's.

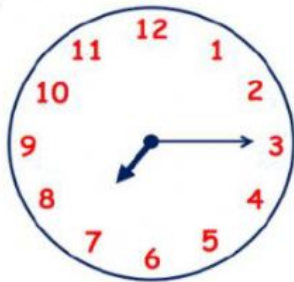
7) What time is it? Use O'clock.







8) What time is it? Use Quarter past.



9) What time is it? Use Half past.



10) What time is it? Use Quarter to.

