








<p>Joe the turkey has 41 feathers. George the turkey has 39 feathers. How many feathers altogether?</p>	<p>Clue Words?</p> <div style="text-align: center;">  </div>
<p>Write an equation</p>	<p>Draw a Picture to solve</p>

NAME: _____

<p>Tracy the turkey found 23 of her babies sleeping in the barn. She has 55 babies. How many more does she still need to find?</p>	<p>Clue Words?</p> <div data-bbox="928 387 1031 472"></div> <div data-bbox="1217 434 1374 454"></div>
<p>Write an equation</p>	<p>Draw a Picture to solve</p>

<p>The farmer's wife baked 64 pumpkin pies. The turkeys ate 23 of the pies. How many pies are left?</p>	<p>Clue Words?</p> <div data-bbox="932 387 1031 472"></div> <div data-bbox="1219 434 1374 454"></div>
<p>Write an equation</p>	<p>Draw a Picture to solve</p>

<p>Sam the turkey lost 16 feathers on Monday. On Tuesday, he lost 9 more than feathers than he did on Monday. How many did he lose on Tuesday?</p>	<p>Clue Words?</p> <div data-bbox="933 387 1031 472"></div> <div data-bbox="1220 434 1374 454"></div>
<p>Write an equation</p>	<p>Draw a Picture to solve</p>

<p>Beth spent 27 minutes doing her chores. She still needs to feed the turkeys. It takes 16 minutes to feed all the turkeys. How many minutes will it take her to complete all of her chores?</p>	<p>Clue Words?</p> <div data-bbox="933 443 1034 533">+</div> <div data-bbox="1220 488 1375 510">—</div>
<p>Write an equation</p>	<p>Draw a Picture to solve</p>

