

Practice 15


Reminders

- The area of a flat surface is a measure of how much space is covered by that surface.
- Area is measured in square units.
- The area of a rectangle equals length times width.


$$A = l \times w$$

Directions: Compute the number of square centimeters in these figures.


1. ____ cm^2




6. ____ cm^2



2. ____ cm^2




7. ____ cm^2



3. ____ cm^2




8. ____ cm^2




4. ____ cm^2



9. ____ cm^2



5. ____ cm^2



10. ____ cm^2

