



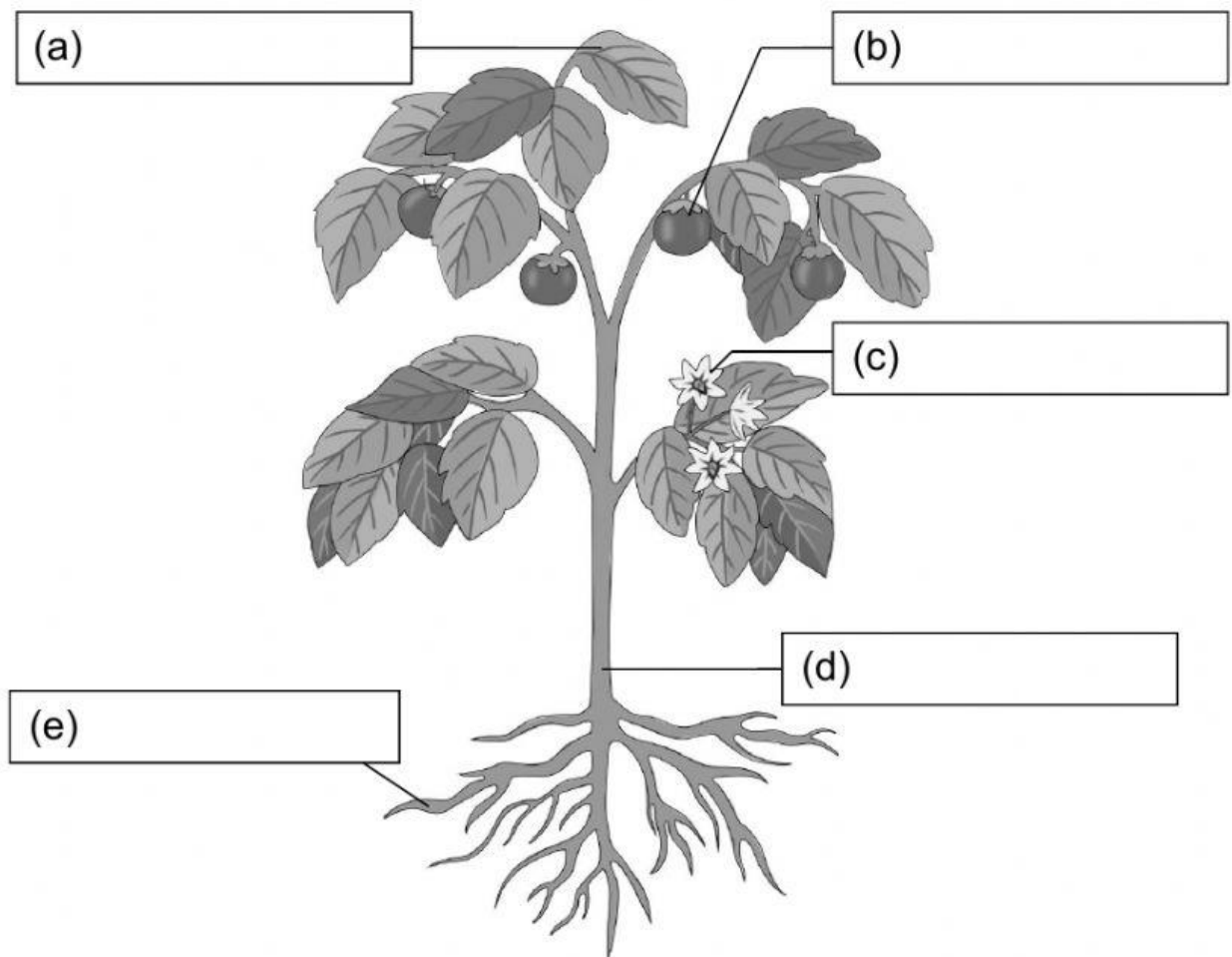
SCIENCE ASSESSMENT

Name: _____ Class: _____ Date: November 3, 2020

Answer **all** questions.

1. This picture shows a tomato plant.

Write down the names of its parts.



Root

Leaf

Stem

Flower

Fruit

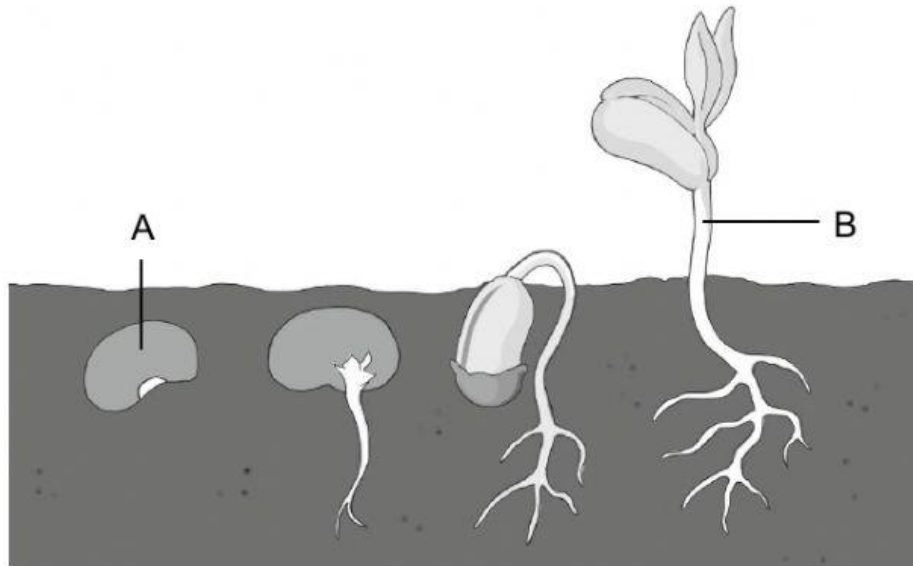
2. Is each sentence true or false?

Tick (**V**) the correct box beside each sentence.

	True	False
All plants have flowers and fruit.	<input type="checkbox"/>	<input type="checkbox"/>
Trees have stems.	<input type="checkbox"/>	<input type="checkbox"/>
Seed comes from fruit.	<input type="checkbox"/>	<input type="checkbox"/>
Seeds and seedlings need water to grow.	<input type="checkbox"/>	<input type="checkbox"/>
The leaves grow first from the seeds.	<input type="checkbox"/>	<input type="checkbox"/>



3. This picture shows how A grows into B.



- (a) Name A and B. Use the helping words.

seedling

seed

A: _____

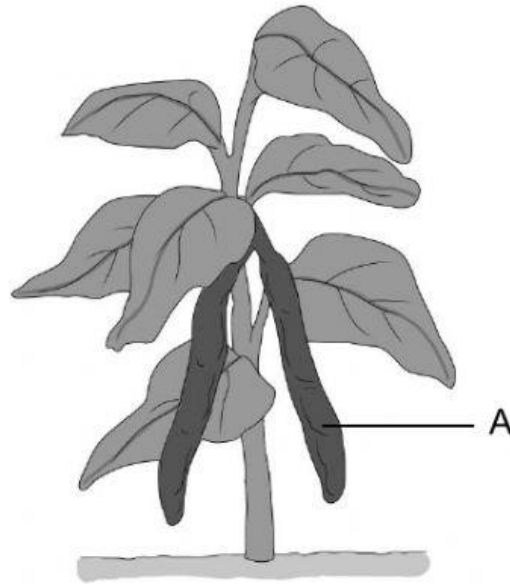
B: _____

- (b) What does A need to grow into B?

- (c) Which part grows from A first, the leaf, stem or root?



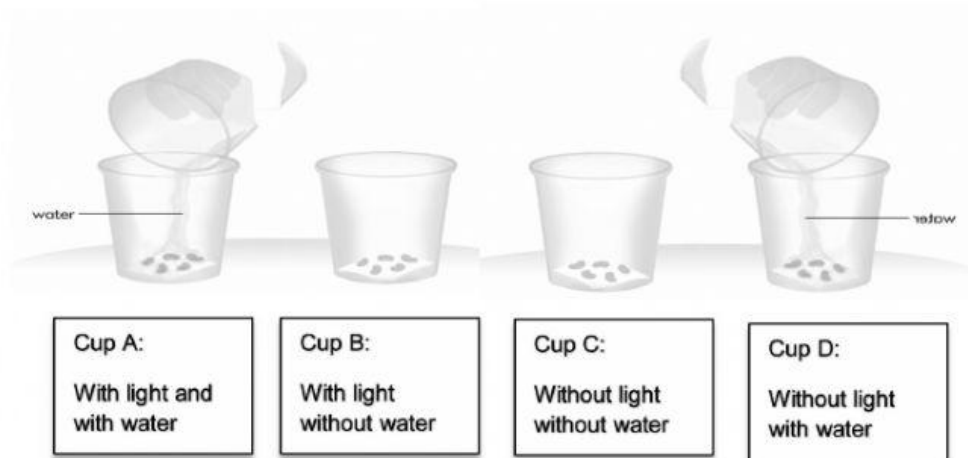
- (d) Seed comes from part A of the plant.



What is part A?



4. Ali want to make an experiment about growing seeds, he puts the seeds into some cups.



- a. Which cups of the seeds that grow? _____
- b. What happen with the seeds in cup B and C?
- _____

5. Fatimah has four plants.




Plant A:
Has water,
placed in a dark room



Plant B:
No water,
placed in a dark room



Plant C:
Has water,
placed under the Sun



Plant D:
No water,
placed under the Sun

- a. Which plant will grow well? _____
- b. Plant _____ will grow well because it _____

- c. What happen with the plant that has no water? _____

Self reflection: (tick ✓ the picture)



**I can do the task
by myself**



**I need a little
help**



**I need a lot
of help**