


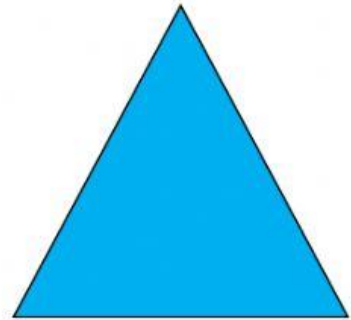

Name: _____

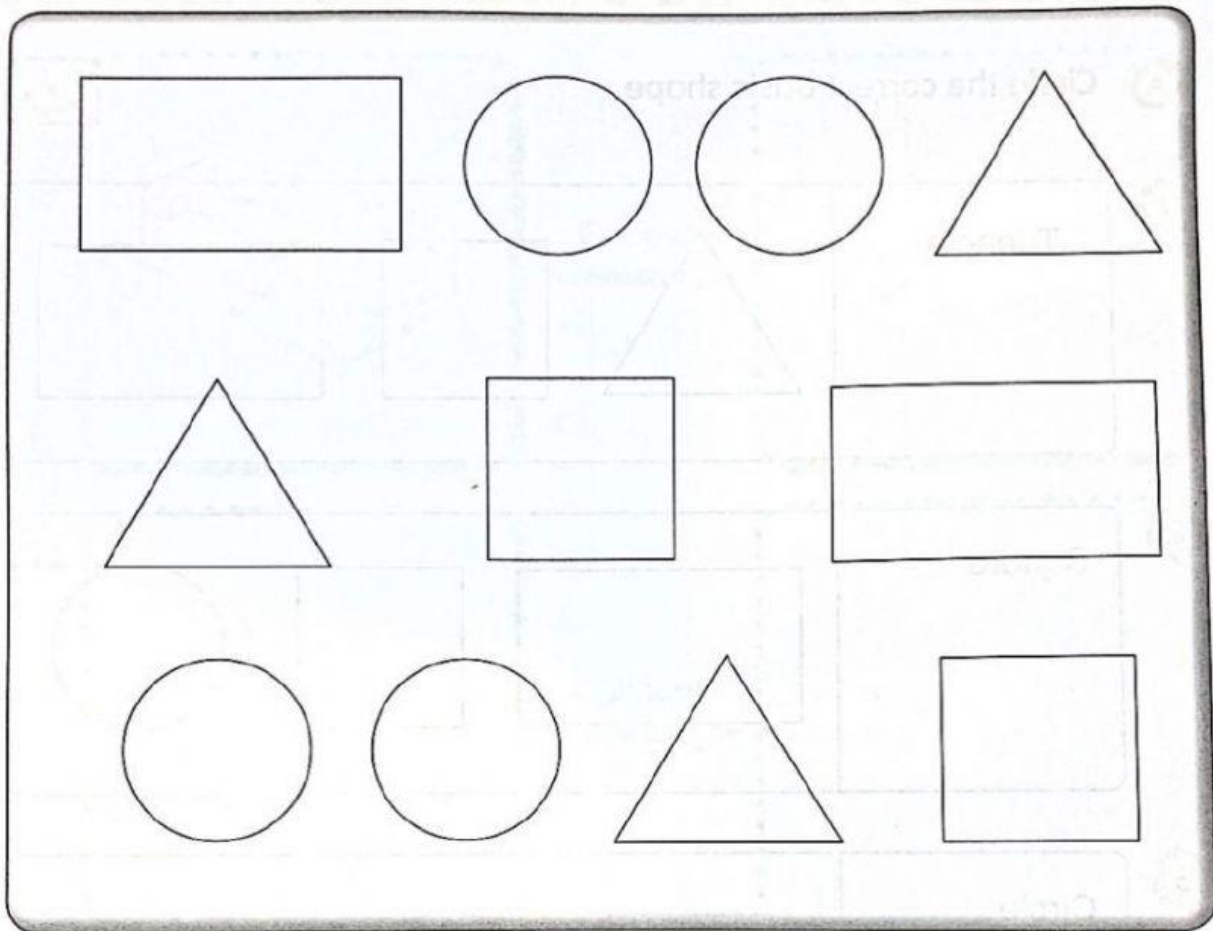
Class: _____

TOPIC: BASIC SHAPES

A

Label the basic shapes below



B**The following diagrams show basic shapes.**

Complete the table by writing the number of basic shapes shown in the diagram.

Basic shape	Number
1 Triangle	
2 Square	
3 Rectangle	
4 Circle	

c

Observe the robot below and fill in the blanks with the correct basic shapes. **K8AT**

Hi, my name is Robo. The shape of my face is (1) _____.
There are two (2) _____ on my face. I wear a hat which is
a (3) _____. My body is a (4) _____ shape.
My beautiful shoes are in the shape of a (5) _____. Each
of my arm is a (6) _____.

