

Maths Test Practice

A)-Write in number or in word form.

Example:

10,623: ten thousand, six hundred and twenty-three

One thousand, two hundred and ten: 1,210

1) 1,345: _____

2) 3,798: _____

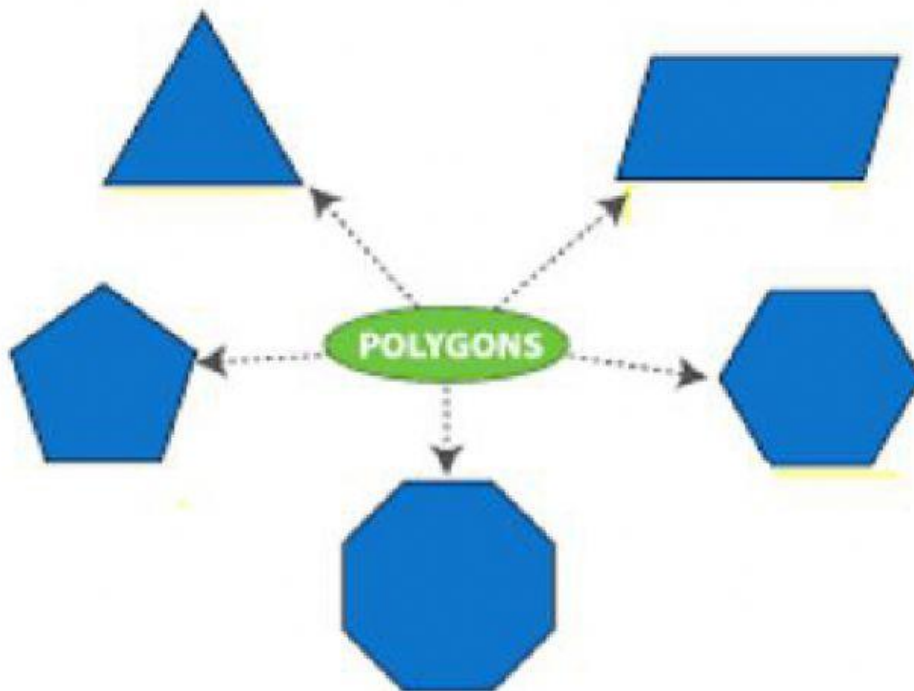
3) 7,679: _____

4) Two thousand, one hundred and twenty-four: _____

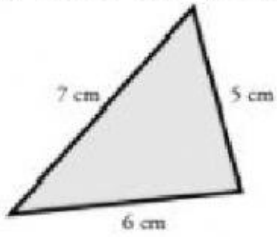
5) Twenty-six thousand, four hundred and eleven: _____

B) Write the name of the following polygons.

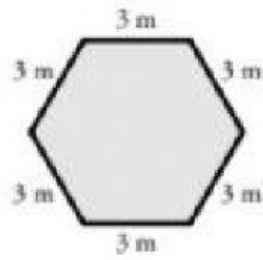
quadrilatetal triangle octagon pentagon hexagon



C) Find the perimeter of each shape.



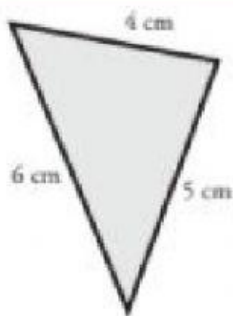
Perimeter: _____



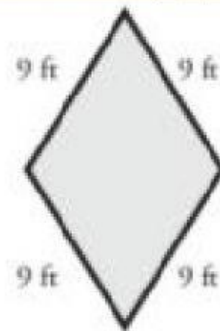
Perimeter: _____



Perimeter: _____



Perimeter: _____



Perimeter: _____