





Use the arrays below to answer each set of questions.

1.  a. How many rows of erasers are there? _____
b. How many erasers are there in each row? _____

2.  a. What is the number of rows? _____
b. What is the number of objects in each row? _____

3.  a. There are 3 squares in each row. How many squares are in 5 rows? _____
b. Write a multiplication expression to describe the array. _____

4.  a. There are 6 rows of stars. How many stars are in each row? _____
b. Write a multiplication expression to describe the array. _____