



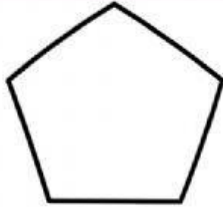
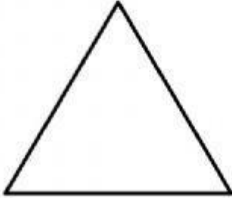
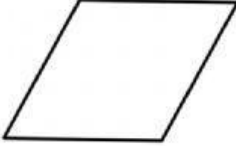
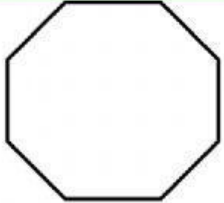
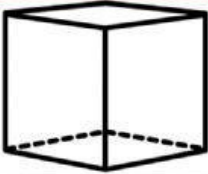

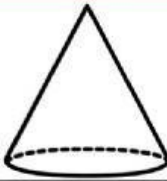



1. Write the number of sides and corners for each shape.

Word Bank				
<input type="checkbox"/> trapezoid				
<input type="checkbox"/> square				
<input type="checkbox"/> circle				
<input type="checkbox"/> hexagon				
<input type="checkbox"/> rectangle				
	____ sides	____ sides	____ sides	____ sides
	____ corners	____ corners	____ corners	____ corners

Word Bank				
<input type="checkbox"/> octagon				
<input type="checkbox"/> rhombus				
<input type="checkbox"/> star				
<input type="checkbox"/> triangle				
<input type="checkbox"/> pentagon				
	____ sides	____ sides	____ sides	____ sides
	____ corners	____ corners	____ corners	____ corners

2. Write the number of faces, edges and vertices for each shape.

Word Bank				
<input type="checkbox"/> cone				
<input type="checkbox"/> cylinder				
<input type="checkbox"/> rectangular prism				
<input type="checkbox"/> cube				
<input type="checkbox"/> triangular prism				
	____ edges	____ edges	____ edges	____ edges
	____ faces	____ faces	____ faces	____ faces
	____ vertices	____ vertices	____ vertices	____ vertices