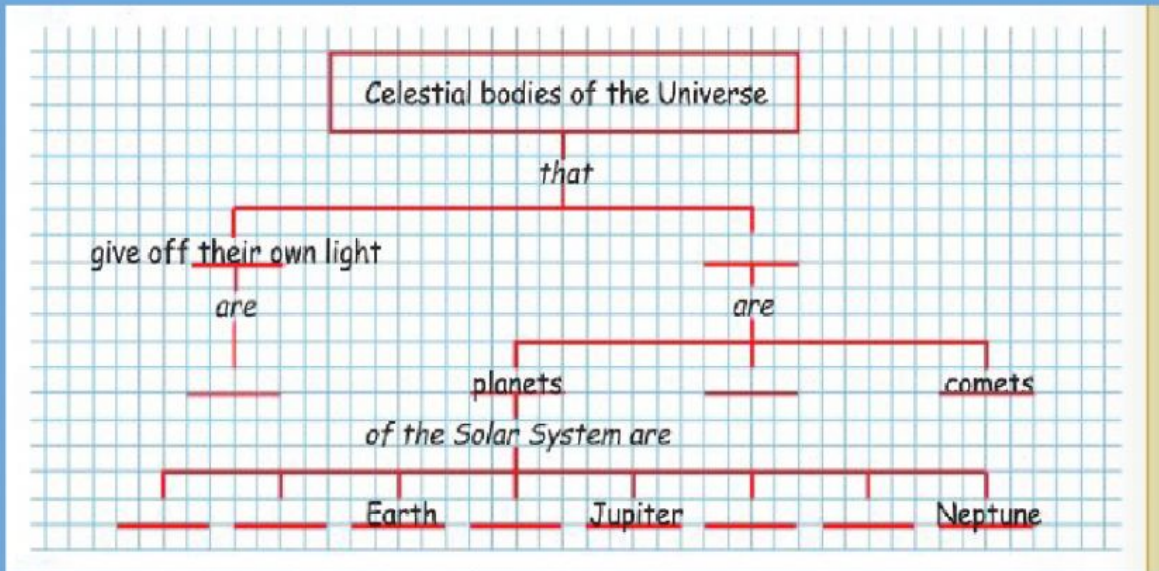


Natural Science
Unit 7: The Universe

Student's name: _____

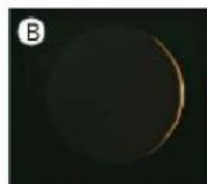
1- Complete the following chart about celestial bodies of the Universe.



2- Complete the following table.

Movement of the Earth	How long it takes	What it causes
Rotation		
Orbit		

3- The Moon. Match the pictures with their correct name.



NEW MOON

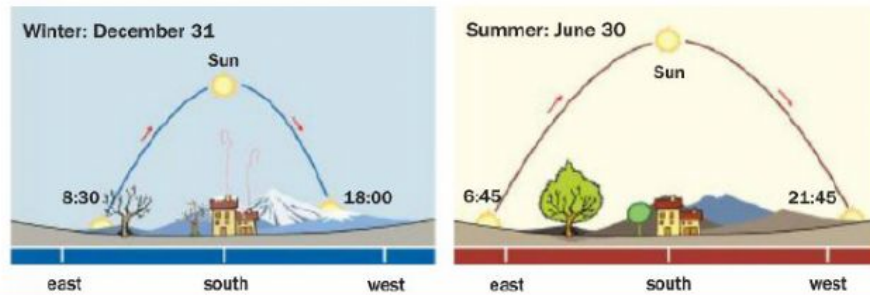
FULL MOON

FIRST QUARTER

LAST QUARTER

4- Compare the pictures and answer the questions.

To compare two pictures, you must first look at both pictures and then find the differences between them.



5- Look at the pictures above and answer the following questions.

- Where does the Sun rise, in the east or in the west?
Where does it set?
- What time does the Sun rise in winter? And set?
- What time does the Sun rise in summer? And set?
- How many hours of daylight are there in winter?
And in summer?
- How long is the night (in hours) on December 31?
How long is the night on June 30?

6- Think about the two last questions.

1- Is it the same case for Argentina? Why?

2- Explain what happens in our country.