






Name: \_\_\_\_\_

## Ordinal Numbers and Non-Standard Measurement

Look at the pictures. Write the correct answer.

				
<i>zebra</i>	<i>elephant</i>	<i>turtle</i>	<i>pig</i>	<i>pony</i>

2<sup>nd</sup> \_\_\_\_\_


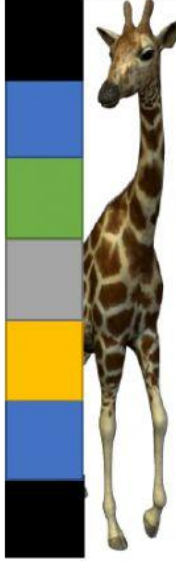

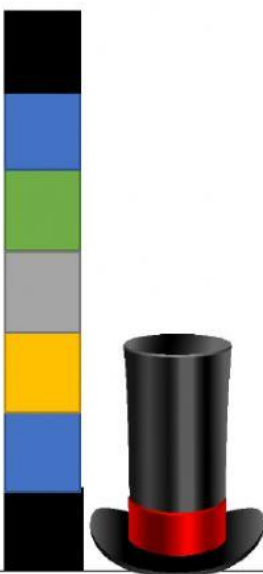
5<sup>th</sup> \_\_\_\_\_

1<sup>st</sup> \_\_\_\_\_

3<sup>rd</sup> \_\_\_\_\_

4<sup>th</sup> \_\_\_\_\_

Count the cubes. Then write how many.

			
_____cubes	_____cubes	_____cubes	_____cubes