

Name : _____

TOPIC : BASICS OF BUILDING

1) Write the name of the basic shape correctly.


Triangle

Circle

Square

Rectangle


a.



b.



c.



d.



2) Name the basic shape of each object below.

a Banknote



b Set square



c Orange



d Postage stamp



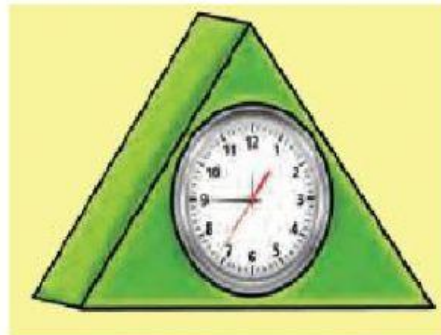
e Magnifying glass



f Whiteboard



3) Observe the picture of the clock below.



a) How many basic shape can you identify?

b) State the basic shapes.

i) _____

ii) _____

iii) _____