


MATHEMATICS


DESCENDING ORDER


Name: _____ Grade: 2

Instructions: Write the numbers in descending order.









5. Look at the sets of numbers. Choose the numbers that are in descending order.

- a. 309, 284, 230, 319
- b. 319, 309, 284, 230
- c. 230, 284, 309, 319
- d. 309, 319, 280, 230