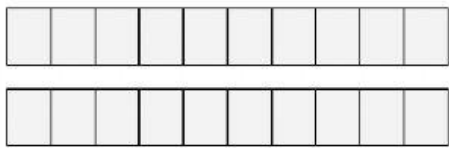
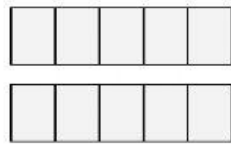


Selecciono los cuadrados para representar cada fracción

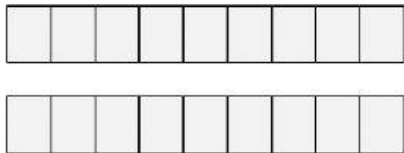
$$\frac{15}{10}$$



$$\frac{9}{5}$$



$$\frac{12}{9}$$



$$\frac{6}{7}$$

