

# ESTIMATE MASS OF OBJECTS

## Activity 1/

1 Tick (✓) the suitable mass.

a

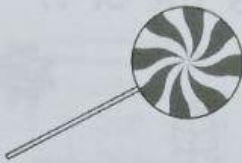


50 g



500 g

b




2 kg



20 g

c



10 kg



1 kg

d



120 g



12 kg

e



60 g




6 kg

f



40 g



40 kg