


# Model Perimeter

**Perimeter** is the distance around a figure.

**Find the perimeter of the figure.**

**Step 1** Choose a unit to begin counting and label it 1.



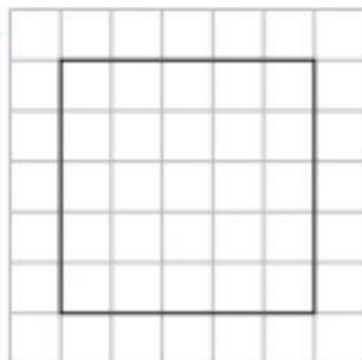
**Step 2** Count each unit around the figure to find the perimeter.  
16 units



So, the perimeter of the figure is 16 units.

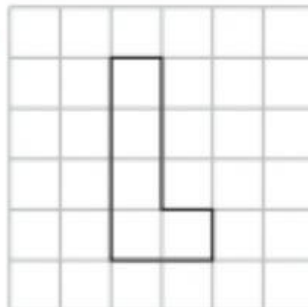
**Find the perimeter of the figure. Each unit is 1 centimeter.**

1.



\_\_\_\_\_ centimeters

2.



\_\_\_\_\_ centimeters