













WHAT TIME IS IT? (1)

		
It's three o'clock	It's eleven o'clock	It's nine o'clock
It's twelve o'clock	It's half past eleven	It's two o'clock
		
It's half past five	It's four o'clock	It's half past nine
It's half past six	It's five o'clock	It's half past six
		
It's eleven o'clock	It's half past two	It's one o'clock
It's ten o'clock	It's half past ten	It's nine o'clock
		
It's eight o'clock	It's eleven o'clock	It's half past two
It's half past eight	It's eight o'clock	It's half past three