



Nom:

Data:

1. Comprova gràficament que les fraccions indicades són equivalents. Escriu una parella de fraccions més equivalents per cada cas.

$$\frac{2}{3} \text{ i } \frac{4}{6} \quad \begin{array}{|c|c|} \hline & \\ \hline & \\ \hline & \\ \hline \end{array} \quad \begin{array}{|c|c|} \hline & \\ \hline & \\ \hline & \\ \hline \end{array} \quad \text{---} = \text{---}$$

$$\frac{1}{4} \text{ i } \frac{3}{12} \quad \begin{array}{|c|c|c|c|} \hline & & & \\ \hline & & & \\ \hline & & & \\ \hline & & & \\ \hline \end{array} \quad \begin{array}{|c|c|c|c|} \hline & & & \\ \hline & & & \\ \hline & & & \\ \hline & & & \\ \hline \end{array} \quad \text{---} = \text{---}$$

$$\frac{3}{8} \text{ i } \frac{6}{16} \quad \begin{array}{|c|c|c|c|} \hline & & & \\ \hline & & & \\ \hline & & & \\ \hline & & & \\ \hline \end{array} \quad \begin{array}{|c|c|c|c|} \hline & & & \\ \hline & & & \\ \hline & & & \\ \hline & & & \\ \hline \end{array} \quad \text{---} = \text{---}$$

2. Representa gràficament cada una de les fraccions.

$$\frac{1}{2}$$






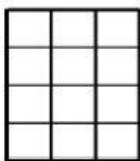
$$\frac{1}{3}$$

$$\frac{1}{4}$$

$$\frac{2}{3}$$

$$\frac{2}{4}$$

$$\frac{3}{4}$$





3. Busca 3 fraccions equivalents.

$$\frac{1}{2} = \underline{\quad} = \underline{\quad} = \underline{\quad}$$

$$\frac{5}{8} = \underline{\quad} = \underline{\quad} = \underline{\quad}$$

$$\frac{3}{7} = \underline{\quad} = \underline{\quad} = \underline{\quad}$$

