



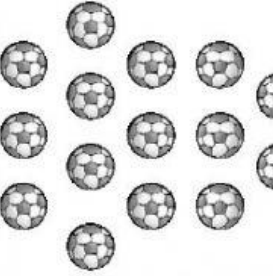
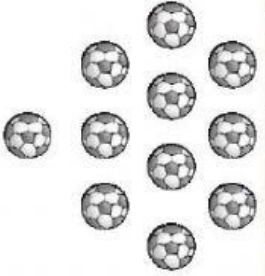




# NUMBERS 10 TO 20

Tick(✓) the group with more objects.

|   |  |
|---|--|
|  |  |
| <input type="checkbox"/>  | <input type="checkbox"/>   |

|   |  |
|---|--|
|  |  |
| <input type="checkbox"/>  | <input type="checkbox"/>   |

|   |   |
|---|---|
|  |  |
| <input type="checkbox"/>  | <input type="checkbox"/>  |

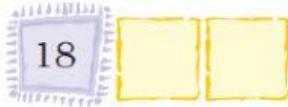
|   |  |
|---|--|
|  |  |
| <input type="checkbox"/>  | <input type="checkbox"/>   |



Write the **missing** numbers.



What comes after 18?



What comes after 14?



What comes before 16?



Write numbers before and after 9?



Write numbers before and after 18?



Write numbers before and after 10?





Tick the **bigger** number.

11   13

13   15

18   8

12   8

17   7

11   10

16   6

1   11

9   19



Circle the **smaller** number.

20   10

6   4

10   12

11   9

5   15

12   2

16   17

9   10

15   13