

MATHS

REVISION!



2018 2019

2nd GRADE

21. I have 50p piece, a 2p piece, a 20p piece, a 5p piece, and a two 2p pieces. How much do I have altogether? _____

22. Write the next two numbers on the following sequence.

2, 4, 6, 8, _____, _____

23, 20, 17, 14, _____, _____

6, 10, 14, 18, _____, _____

34, 30, 28, 24, _____, _____

8, 16, 24, 30, _____, _____

23. Complete the sentences.

There are _____ minutes in an hour.

There are _____ hours in a day.

There are _____ days in a year.

There are _____ seconds in a minute.

There are _____ months in a year.

There are _____ days in four weeks.

There are _____ months in two years.

There are _____ minutes in four hours.

24. Eleven children are given 8 sweets, how many sweets are there altogether? _____

25. Add the numbers.

Twenty- four, twelve and thirty-six

Ninety- five, twenty-two and ten

Twenty- eight, sixteen and nine

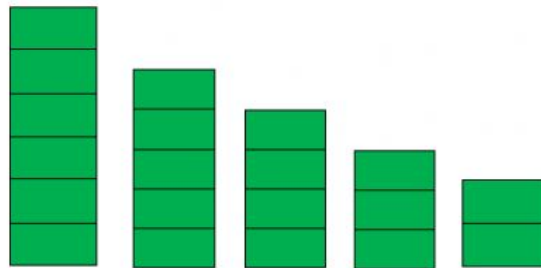
26. What is three multiplied by eight?

27. What is six multiplied by seven?

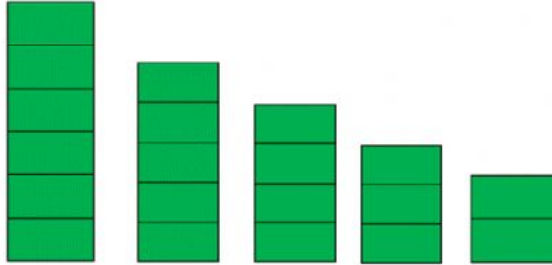
28. What is eight multiplied by five?

29. What is four multiplied by eight?

30. Circle the two piles that have 10 bricks in total.



31. Circle three piles that have 12 bricks in total.



32. Refer the number below and follow the instruction to answer the following questions.






55, 28, 20, 33, 35, 111, 41,
36

- Ring the number that can be divided by 5.
- Check the number that is bigger than 24.
- Underline all the odd number.
- Mark (x) the number that is less than 46.

33. Eight children share a bag of cookies, each child has 3 cookies.
How many cookies were in bag? _____

34. Ms. Jane does a school survey about favourite subjects.

Here are the results.

Subjects	Popularity
Mathematics	
English	
Science	
Arabic	
Others	


Key:  represent 10 people

a. Which subject is the most popular?

b. How many children chose English as their favourite subject?

c. How many children took part in the survey?

35. Here are some apples. They are put into 3 equal baskets. How many apples are there in each basket?



36. Julia has these coins. How much money does she have?



37. Dave has £8.98. He buys a book that cost £4.39. How much money does he have left?

38. Christiana has £7.45. She buys a purple pen that cost 85p and a crayons that cost £3.45. How much money does she have left?

39. Kemi has £6.87. She buys a slipper that cost £3.45. How much money does she have left?
