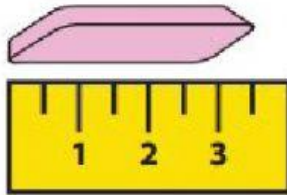
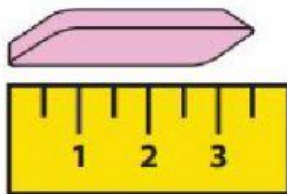



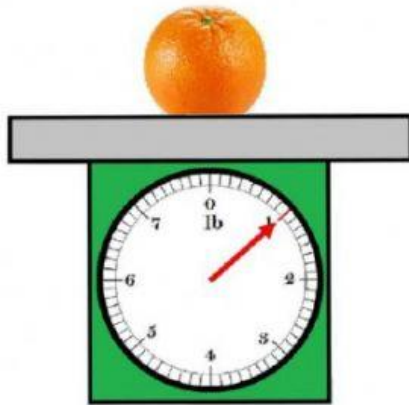
You use a ruler to measure how long an object is.



You use a scale to measure how much something weighs.



The eraser is \_\_\_\_\_ cm long



The orange weighs \_\_\_\_\_ pounds.

Ruler	Scale
-------	-------

To measure length you use a \_\_\_\_\_.

To measure weight you use a \_\_\_\_\_.